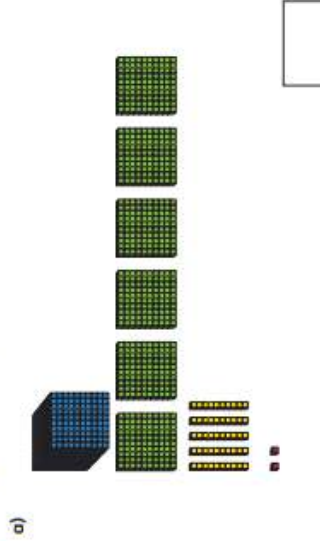


1 How many nails are there?

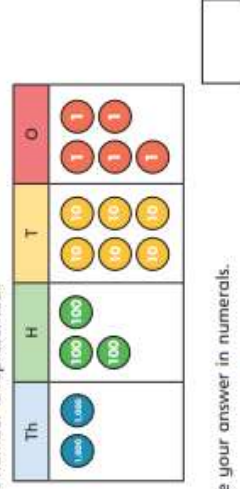


There are  nails.

2 What numbers are represented?




3 What number is represented?



4 Circle the base 10 or counters to show each number.


a) 2,053




b) 5,124



b)



5 Mo is trying to make the number 3,250. He represents it on a place value chart.



Is Mo correct?

How do you know?

\_\_\_\_\_

\_\_\_\_\_

6 Use base 10 or place value counters to make these numbers.

a) 2,391    b) 1,050    c) 3,303

7 Write the value of the digit in bold.

- a) **7**,120 \_\_\_\_\_
- b) 3,**9**15 \_\_\_\_\_
- c) 2,**0**04 \_\_\_\_\_
- d) **6**71 \_\_\_\_\_
- e) 5,**9**18 \_\_\_\_\_

8 Write a 4-digit number with 7 tens.

Write a 3-digit number with 7 tens.

Write a 2-digit number with 7 tens.

9 Here are some clues to a 4-digit number.

- There are 6 hundreds.
- There are more tens than ones.
- The sum of the digits is 12.

What could the number be? How many possible numbers can you find?

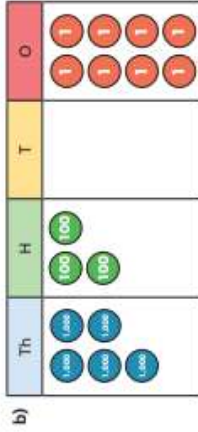
\_\_\_\_\_

\_\_\_\_\_

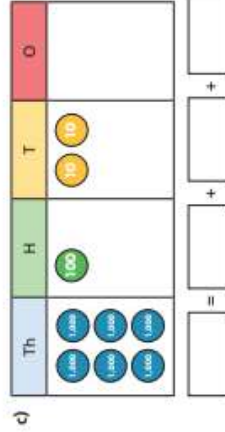
1 Complete the number sentences.



$2,156 = 2,000 + \square + \square + \square$



$5,308 = \square + \square + \square$



4 Complete the sentences.

a) 2,348 is equal to 2 thousands,  $\square$  hundreds,  $\square$  tens and  $\square$  ones.

b) 5,072 is equal to  $\square$  thousands,  $\square$  hundreds,  $\square$  tens and  $\square$  ones.

c)  $\square$  is equal to 2 thousands, 7 hundreds and 6 tens.

d)  $\square$  is equal to 8 thousands and 2 ones.

e) 54 ones is equal to  $\square$  tens and  $\square$  ones.

f) 28 tens is equal to  $\square$  hundreds  $\square$  tens.

5 Complete the number sentences.

a)  $2,909 = 2,000 + 900 + \square$

$2,909 = 2,900 + \square$

$2,909 = 1,000 + 900 + \square$

b)  $7,156 = 7,000 + 100 + \square$

$7,156 = 56 + \square$

$7,156 = 6 + \square$

2 Complete the number sentences.

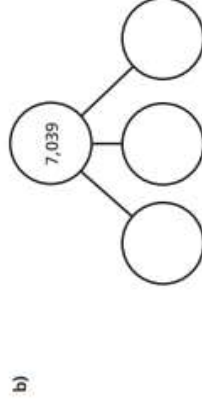
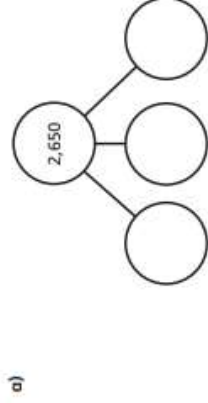


$3,472 = 3,000 + \square + \square + \square$

$3,472 = 2,000 + \square + \square + \square$

$3,472 = 1,000 + \square + \square + \square$


3 Complete the part-whole models.



© White Rose Maths 2017

6 Explain why 20 hundreds is equal to 2,000

7 Alex has 4 digit cards.

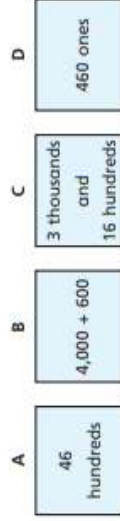


She makes a 4-digit number.

Her number has 7 thousands and 1 ten.

What numbers could Alex have made?

8 Jack has some number cards.



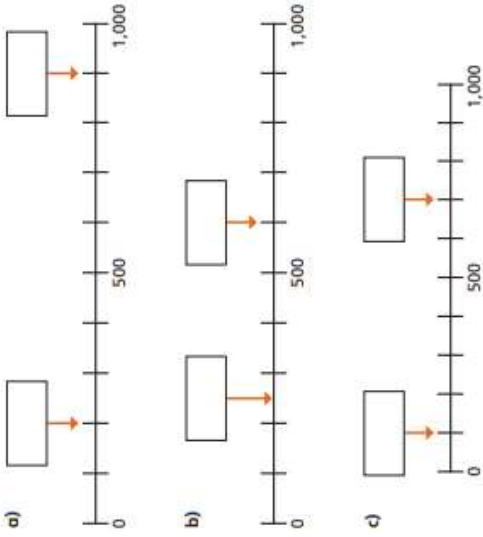
a) Which number card is not equal to the others? Card  $\square$

b) Write another number card that is equal to Card B.

1 Complete the number line.



2 What numbers are the arrows pointing to?



3 a) Label 470 on the number line.



b) Label 280 on the number line.



7




Is Alex correct? How do you know?

---



---

3 Write these numbers on the number line.




4 Here is a number line from 0 to 1,000

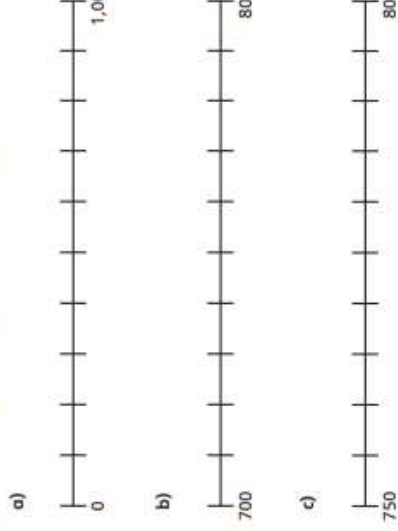


Label 500 and 750 on the number line.


5 Complete the number lines.



8 Draw an arrow to 785 on each number line.

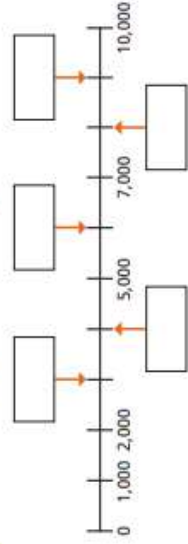


9 Estimate where these numbers go on the number line.




How did you do this? Talk about it with a partner.

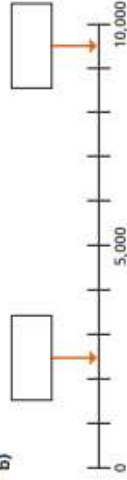
1 What numbers are the arrows pointing to?



2 What numbers are the arrows pointing to?



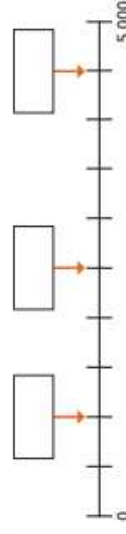
b)



5 Complete the number line.



6 What numbers are the arrows pointing to?



7 a) Estimate the values of A, B and C.

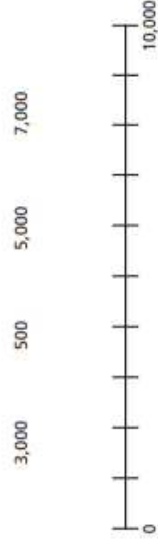


A =  B =  C =

b) D is greater than A but less than B. Write three possible values of D.

\_\_\_\_\_

3 Label the number line with these numbers.



4 What is the value of A on each number line?



Circle your answer.

5,000    6,000    1,600    1,500

b)



A =

8



This number line goes up in thousands.



Is Annie correct?

Explain your answer.

\_\_\_\_\_  
\_\_\_\_\_  
\_\_\_\_\_


9 What could the missing numbers be?





# Find 1, 10, 100 more or less

1 Annie makes a number using base 10



- a) What number has Annie made?  
Annie has made the number
- b) What is 100 more than Annie's number?  
100 more than Annie's number is
- c) What is 10 more than Annie's number?  
10 more than Annie's number is
- d) What is 1 more than Annie's number?  
1 more than Annie's number is

4 What is 10 more than each of these numbers?

- a) 362  c) 703
- b) 180  d) 695

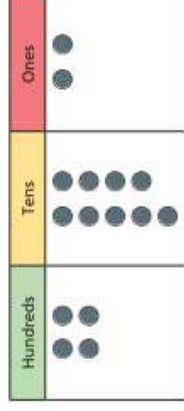
5 What is 10 less than each of these numbers?

- a) 789  c) 300
- b) 245  d) 404

6 Complete the sentences.

- a) 100 more than 763 is
- b)  is 100 more than 765
- c)  is 100 less than 503
- d) 1 less than 300 is
- e) 10 less than 109 is
- f)  is 10 less than 972
- g)  is 1 less than 699

2 What number is represented?




The number represented is

- a) What is 100 more than the number?
- What is 10 more than the number?
- What is 1 more than the number?
- b) What is 100 less than the number?
- What is 10 less than the number?
- What is 1 less than the number?

3 What is 100 more than each of these numbers?

- a) 700  c) 590
- b) 385  d) 47

7 Tom makes a number on a place value chart, but one of the counters slips off the chart.



What could Tom's number have been?

\_\_\_\_\_

8 Complete the table.

100 more	10 more	1 more	number	1 less	10 less	100 less
			473			
398						890

9 Kim thinks of a number.

100 less than Kim's number is 900

What is 10 less than Kim's number?

# 1,000 more or less

Use the place value chart to help you complete the sentences.

1 Write numerals to complete the table.

1,000 less	number	1,000 more

2 Find 1,000 more and 1,000 less than each number.

a)   $\xleftarrow{1,000 \text{ less}}$  1,000  $\xrightarrow{1,000 \text{ more}}$  7,000

b)   $\xleftarrow{1,000 \text{ less}}$  1,000  $\xrightarrow{1,000 \text{ more}}$  3,918

c)   $\xleftarrow{1,000 \text{ less}}$  1,000  $\xrightarrow{1,000 \text{ more}}$  1,203

3 Complete the sentences.

- a) 1,000 more than 7,163 is
- b)  is 100 more than 2,360
- c)  is 100 less than 1,900
- d) 1 less than 1,500 is
- e) 10 less than 109 is
- f)  is 1,000 more than 972
- g)  is 10 less than 5,990

6 Complete the number tracks.

1,760	1,770	1,780	<input type="text"/>	<input type="text"/>
365	1,365	<input type="text"/>	3,365	<input type="text"/>

7 Is this always, sometimes or never true?

When you find 100 more than a 4-digit number, only the 100s column changes.

Th	H	T	O
●●●●	●	●●●●●●●●	●●

- a) 1,000 more than 4,192 is
- b) 100 more than 4,192 is   
100 less than 4,192 is
- c) 10 less than 4,192 is   
10 more than 4,192 is
- d) 1 less than 4,192 is   
1 more than 4,192 is

4 a) What is 100 less than 2,000?

b) What is 10 less than 2,000?

c) What is 1 less than 2,000?

8 Complete the number sentences.

- a)  $5,190 + 100 =$   f)  $6,195 + 10 =$
- b)  $395 + 1,000 =$   g)  $3,070 - 100 =$
- c)  $7,090 - 10 =$   h)  $792 + 10 =$
- d)  $7,090 + 10 =$   i)  $5,000 - 100 =$
- e)  $4,062 - 100 =$   j)  $1,093 + 10 =$

9 a) Mo thinks of a number.

1,000 less than Mo's number is 5,751  
What is 10 less than Mo's number?

b) 1 less than Ron's number is 100 more than Mo's number.  
What is Ron's number?

Compare 4-digit numbers

1 Who has the smaller amount of drink?



\_\_\_\_\_ has the smaller amount of drink.  
Explain how you know.

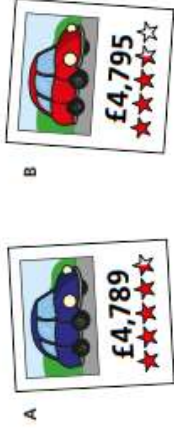
2 Which is the greater number? Tick your answer.



Write the missing phrase.

- a) 4,720 \_\_\_\_\_ 4,635 is greater than
- b) 5,100 \_\_\_\_\_ 800
- c) 3,195 \_\_\_\_\_ 3,591
- d) 2,000 \_\_\_\_\_ 7,999

7 Which is the more expensive car?

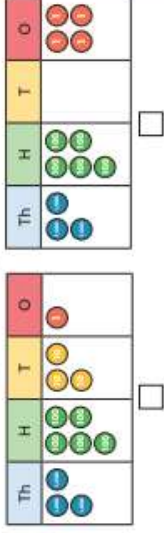


Describe the steps you used to compare the car prices.

8 Write <, > or = to compare the numbers.

- a) 6,000 ○ 3,981      d) 32 ○ 2,000
- b) 4,512 ○ 4,521      e) £6,418 ○ £6,419
- c) 900 ○ 1,200

3 Which number is greater? Tick your answer



4 Circle all the numbers greater than 4,500.

- 7,000      3,960      4,499      985      4,526

5 Write <, > or = to compare the numbers.

a) 

Th	H	T	O
1	4	9	0

 ○ 

Th	H	T	O
2	0	7	5

b) 

Th	H	T	O
6	2	0	1

 ○ 

Th	H	T	O
6	2	3	5

c) 

Th	H	T	O
7	0	0	5

 ○ 

Th	H	T	O
6	9	2	7

9 Teddy and Scott have some digit cards.



Teddy makes the number 4,571  
Scott says his number is greater than Teddy's.  
Teddy says Scott's number must start with a 5  
Is Teddy correct? Explain how you know.

10 What could the missing digits be?

- a) 4,523 is greater than 4,5\_\_7
- b) 7,000 < \_\_513
- c) 3,854 > 3,85\_\_
- d) 5,650 > 4,\_\_7\_\_

11 Write all the possible missing digits.

a) 2,778 is less than 2,7\_\_4

b) 6,000 > \_\_259

# Order numbers

1 Whitney, Tom and Dani are making numbers with base 10

Whitney	Tom	Dani

- a) Who has made the greatest number? \_\_\_\_\_  
 Explain how you know. \_\_\_\_\_  
 \_\_\_\_\_  
 b) Write the numbers in order. Start with the smallest number.  
 \_\_\_\_\_

2 Write the numbers in order. Start with the greatest number.

2,600	2,540	2,595
-------	-------	-------

\_\_\_\_\_

- 3 Circle the smallest number in each list.
- a) 625   1,400   3,280   4,000  
 b) 2,372   2,400   2,089  
 c) 6,180   6,175   6,190   6,241

4 The table shows the distances of five cities from London.

City	Distance from London
New York	5,570 km
Barcelona	1,138 km
Cairo	3,511 km
Oslo	1,150 km
Rome	1,435 km

- a) Which of these cities is closest to London? \_\_\_\_\_  
 b) Which city is furthest from London? \_\_\_\_\_  
 c) Which city is 3rd closest to London? \_\_\_\_\_

- 7 Write each set of numbers in order. Start with the smallest number.
- a) 2,600   1,750   1,780   2,304  
 \_\_\_\_\_  
 b) 728   8,200   1,322   8,079  
 \_\_\_\_\_

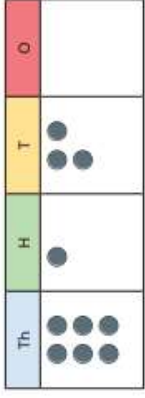
- 3 Circle the greatest number.
- 1,700   3,803   7,500   5,270

How do you know it is the greatest number?

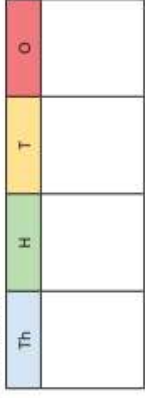
\_\_\_\_\_

\_\_\_\_\_


- 4 Teddy uses 10 counters to make a number on a place value chart.



Rearrange the counters to make a number that is less than Teddy's.



Rearrange the counters to make a number that is greater than Teddy's.



© White Rose Maths 2019

- 8

982 is greater than 2,340 because 982 starts with a 9 and the other number starts with a 2

What mistake has Jack made?

\_\_\_\_\_

\_\_\_\_\_

\_\_\_\_\_

- 9 a) These numbers are in order from smallest to greatest.

3,\_\_\_25   3,76\_\_   3,\_\_\_58

What could the missing digits be?

\_\_\_\_\_

\_\_\_\_\_

- b) These numbers are in order.

The same digit is missing in each number.

7,\_\_\_56 > 7,\_\_\_3\_\_ > 7,6\_\_8

What could the missing digit be?

How many answers can you find?

\_\_\_\_\_



1 The children have each got some packets of balloons.

Filip	Eva	Mo	Esther

a) How many balloons does each child have?

Filip  Eva  Mo  Esther

b) How many balloons are there in 6 packets?

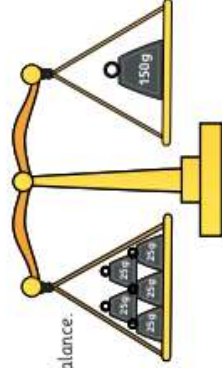
2 Complete the number tracks.

200	225	250					
-----	-----	-----	--	--	--	--	--

750	725	700					
-----	-----	-----	--	--	--	--	--

5 Is this true or false?

These scales will balance.



Explain your answer.

6 Dora has 28 sheets of stickers.

Each sheet contains 25 stickers.

She has 700 stickers in total.



a) How many stickers are there on 29 sheets?

b) How many stickers are there on 30 sheets?

c) How did you work this out?

3 Ron is counting up in 25s from 0 to 1,000

0, 25, 50 ...



a) Circle all the numbers that Ron will say.

- 51    100    175    305  
90    258    720    725

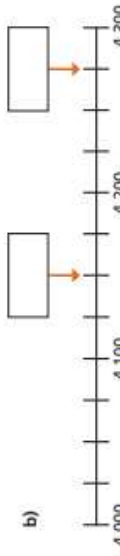
b) Ron keeps counting past 1,000

Ron will say all of these numbers.

- 1,025    1,775    1,900    2,025

Explain how we know this.

4 What numbers are the arrows pointing to?



© White Rose Maths 2019

7 Players in a game win coloured tokens.

A blue token wins 50 points.

An orange token wins 25 points.



a) Kim wins these tokens in round 1



How many points does she win?

Explain how you know.

b) By the end of the game, Kim has 600 points.

How many more points has she won?

What new tokens could she have won?

1 Match the numbers to the Roman numerals.

1	L
5	C
10	V
50	X
100	I

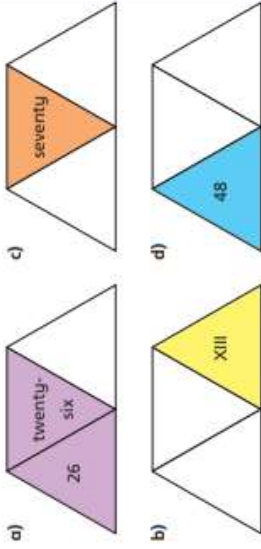
2 Write each number in Roman numerals.

- a) 7  d) 55  g) 17   
 b) 12  e) 72  h) 41   
 c) 23  f) 89  i) 27

3 Write the Roman numeral in numerals and words.

- a) XXIV   
 b) LXXI   
 c) LXVIII   
 d) XCVI   
 e) XXVIII   
 f) XCI

4 Each diagram should show a number in numerals, words and Roman numerals. Complete the diagrams.



3 Eva lives in this house.



What number does Eva live at?

Eva lives at number

4 Jack rolls two 6-sided dice.



What is Jack's total score?

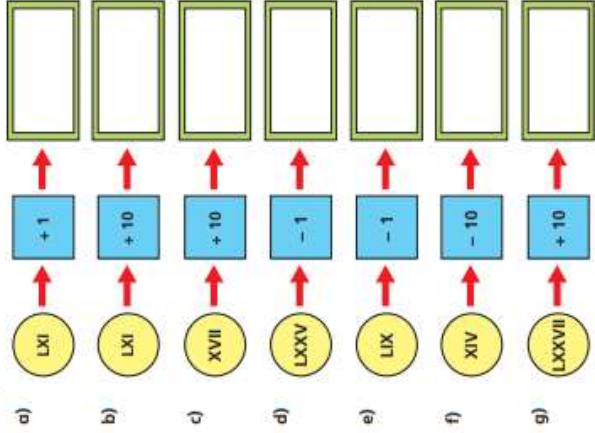
Alex rolls the same 2 dice and gets two different numbers.

Her score is the same as Jack's.

What numbers could Alex have rolled?

and

7 Complete the function machines.



8 Complete the calculation.

XXIX +  = LXI +

How many other calculations can you write that give the same total?

Compare your answers with a partner.